



Back To The Future Education

(Australia) Pty Ltd

ABN 96 091 551 683

www.learningpower.com.au Email: info@learningpower.com.au

Mailing Address P.O. BOX 480 BAULKHAM HILLS. NSW. 1755

Phone Admin 1300 1 MATHS Fax 1300 133 865

1300 1 62 847



Year 3 Assessment

Full Name	Current Grade
Date	Phone Number

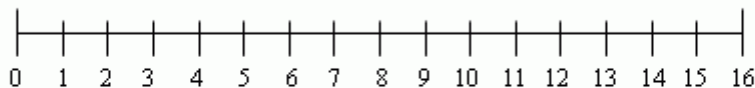
Show all working on these sheets.

Do NOT use a calculator.

1) $6 \times 4 =$

2) $478 +$
 56

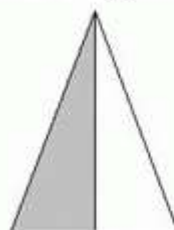
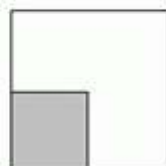
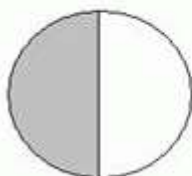
3) Use the number line below to show working out for $16 \div 4$.



$16 \div 4 =$

4) $\$15.00 - \$11.45 =$

5) Circle the diagram below that shows $\frac{1}{4}$ shaded grey.



6) Circle the digit that has the greatest value in the following number.

276

7) Mum made 35 chocolate crackles for the party. Guests ate 17, the dog took one, the neighbours ate 7 and one was squashed on the floor. How many chocolate crackles were left?

8) How many centimetres are in a metre?

cm


9) Write down the number that comes after 1000.

10)



What time does this clock show?
(write your answer in words).

11)

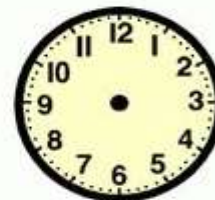


Draw the hands on this clock face so that it shows the time:
twenty – three minutes past five.

12)

06:47am

Draw this digital time on the analog clock.




13)

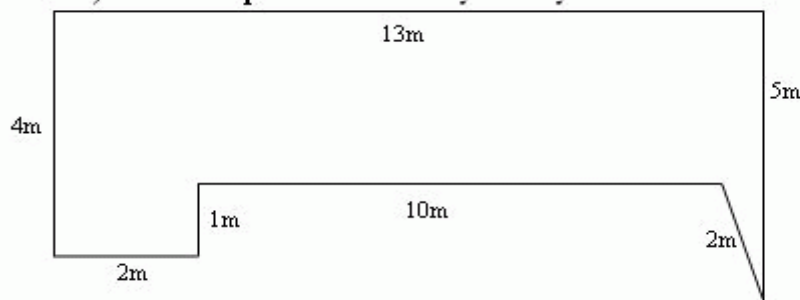


Fill in the numbers on this digital clock, so it matches the analog clock.

14) How many faces does a square have?

15)  How many faces does a cube have?

16) Find the perimeter of my backyard:



P = m

17) $8 \times 7 =$

18) $9 \times 8 =$

19) $12 \times 6 =$

20)
$$\begin{array}{r} 645 \\ - 297 \\ \hline \\ \hline \end{array}$$

Please fax to 1300 133 865 on completion

Result

Recommended Program

Marked By

Date