



# Back To The Future Education

(Australia) Pty Ltd

ABN 96 091 551 683

Mailing Address P.O. BOX 480 BAULKHAM HILLS, NSW, 1755

Phone Admin 1300 133 831 Fax 1300 133 865



## Year 1 - Assessment B

Full Name	Current Grade
Date	Phone Number

**PARENTS: PLEASE FEEL FREE TO READ THE QUESTIONS TO YOUR CHILD.  
DO NOT COACH YOUR CHILD WITH THEIR ATTEMPTS.**

1) Complete the following sums.

a)  $6 + 5 = \underline{\quad}$     b)  $8 + 7 = \underline{\quad}$     c)  $3 + 9 = \underline{\quad}$

2) Complete the following sums.

a)  $\begin{array}{r} 7 + \\ 6 \end{array} \underline{\quad}$                       b)  $\begin{array}{r} 8 + \\ 9 \end{array} \underline{\quad}$                       c)  $\begin{array}{r} 9 + \\ 4 \end{array} \underline{\quad}$

3) Complete the following sums.

a)  $6 + 6 = \underline{\quad}$     b)  $8 + 8 = \underline{\quad}$     c)  $9 + 9 = \underline{\quad}$

4) Complete the following subtractions.

a)  $8 - 5 = \underline{\quad}$     b)  $6 - 2 = \underline{\quad}$     c)  $10 - 4 = \underline{\quad}$

5) Complete the following subtractions.

a)  $\begin{array}{r} 9 - \\ 4 \end{array} \underline{\quad}$                       b)  $\begin{array}{r} 5 - \\ 2 \end{array} \underline{\quad}$                       c)  $\begin{array}{r} 7 - \\ 3 \end{array} \underline{\quad}$

6) Fill in the boxes.

a)  $9 - \boxed{\quad} = 3$

b)  $6 - \boxed{\quad} = 1$

c)  $\boxed{\quad} - 2 = 5$

7) What is the difference between 9 and 2 ? \_\_\_\_\_

8) Complete the following subtractions.

a)  $17 - 10 =$  \_\_\_\_\_ b)  $13 - 6 =$  \_\_\_\_\_ c)  $14 - 5 =$  \_\_\_\_\_

9) Complete the following subtractions.

a)  $\begin{array}{r} 15 \\ - 9 \\ \hline \end{array}$                       b)  $\begin{array}{r} 12 \\ - 4 \\ \hline \end{array}$                       c)  $\begin{array}{r} 17 \\ - 7 \\ \hline \end{array}$

10) Complete the following subtractions.

a)  $11 - 11 =$  \_\_\_\_\_ b)  $14 - 0 =$  \_\_\_\_\_ c)  $10 - 1 =$  \_\_\_\_\_.

11) Complete the pattern.

10 , \_\_\_\_\_ , 30 , \_\_\_\_\_ , 50 , 60 , \_\_\_\_\_ , 80 , \_\_\_\_\_ , 100

12) How much is 3 tens plus 5 tens? \_\_\_\_\_ .

13) Fill in the missing numbers.

61 , 62 , \_\_\_\_\_ , \_\_\_\_\_ , 65 , \_\_\_\_\_ , \_\_\_\_\_ , 68 , 69 , \_\_\_\_\_

14) Fill in the missing numbers.

25 , 30 , \_\_\_\_\_ , 40 , 45 , \_\_\_\_\_ , \_\_\_\_\_ , 60 , 65 , \_\_\_\_\_ .

15) How much does  $70 + 30 = ?$  \_\_\_\_\_ .

16)

a) Which month follows April? \_\_\_\_\_ .

b) Which month comes before November? \_\_\_\_\_ .

17) Which 3 months are in Australia's winter?

a) \_\_\_\_\_ , b) \_\_\_\_\_ , c) \_\_\_\_\_

18) Would a daytime temperature of  $32^{\circ}\text{C}$  feel hot or cold?

\_\_\_\_\_ .

19) How many seconds in one minute? \_\_\_\_\_ .

20) How many days in

a) January? \_\_\_\_\_

b) April? \_\_\_\_\_

c) October? \_\_\_\_\_

d) February in a leap year? \_\_\_\_\_ .

21) How much change will I receive from 50 cents if I buy a banana for 20 cents? \_\_\_\_\_ .

22) How much change will I receive from \$5.00 if I buy a pen for \$2.00? \_\_\_\_\_ .

23) Fill in the boxes.



24)

a) Fill in the boxes and then add the total.

a)  $\square + \square + \square + \square + \square = \square$  triangles.

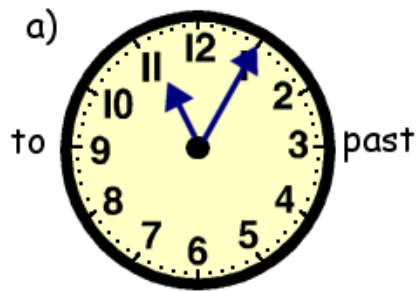
b) There are \_\_\_\_\_ groups of \_\_\_\_\_ .

25) Complete the following additions.

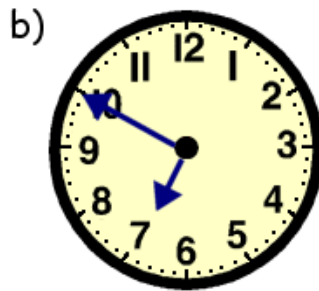
a) 
$$\begin{array}{r} 15 + \\ 13 \\ \hline \end{array}$$

b) 
$$\begin{array}{r} 17 + \\ 12 \\ \hline \end{array}$$

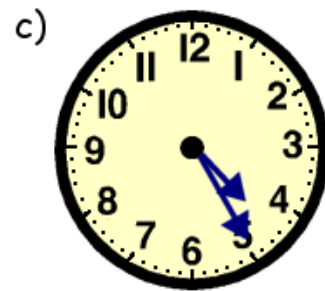
26) Write the times.



past



to



27) How much money do I have?



28) How much money do I have?



Please fax to 1300 133 865 on completion	
Result	Recommended Program
/60	
Marked By	Date

58